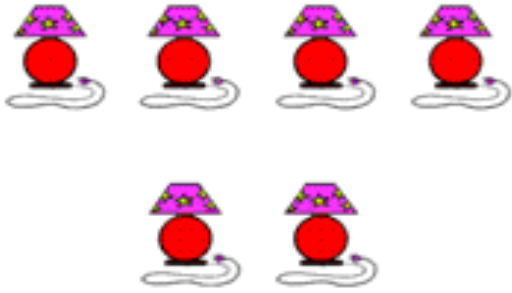


This week we have been learning how to count objects. Please can your child count the following objects by circling the right number at the bottom of the question.



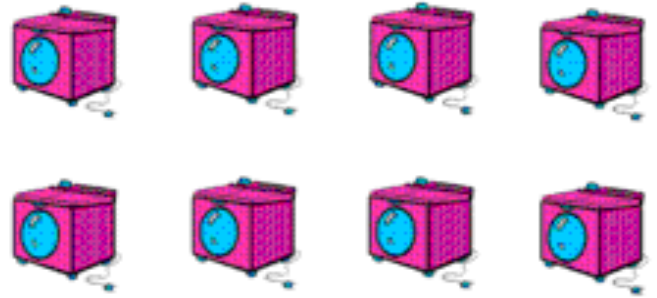
6 7 8 9



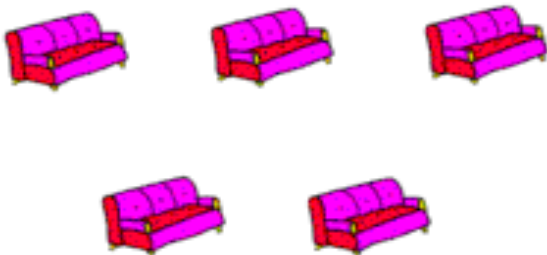
4 5 6 7



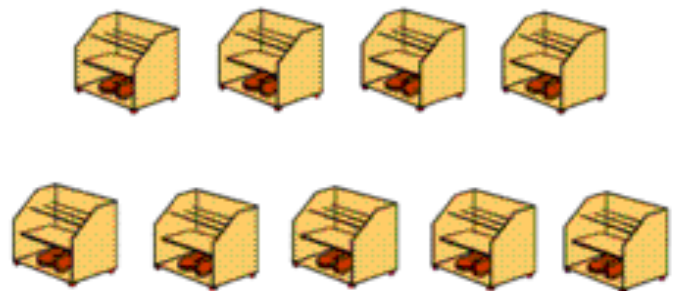
5 6 7 8



5 6 7 8



4 5 6 7



6 7 8 9

Unless otherwise stated, we expect your child to complete this task independently. Please comment if you have supported or changed mistakes.

Parents signature: